



1) What number is being represented in each question? Follow the instructions to add either ones, tens, hundreds or thousands to each.

a)

Thousands	Hundreds	Tens	Ones
5	2	3	1

Number in digits:

Number in words:

Add 3 ones:

b)





Thousands	Hundreds	Tens	Ones
1	0	0	4

Number in digits:

Number in words:

Add 5 hundreds:

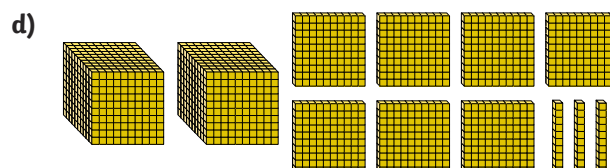
c)

Thousands	Hundreds	Tens	Ones
			

Number in digits:

Number in words:

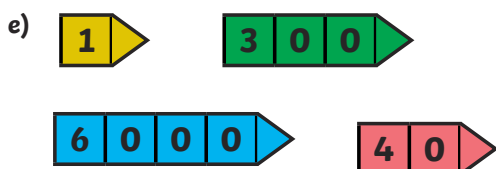
Subtract 7 thousands:



Number in digits:

Number in words:

Add 4 hundreds:



Number in digits:

Number in words:

Subtract 5 hundreds:



Number in digits:

Number in words:

Subtract 3 thousands:

2) a) What number is being represented here?



b) Add 5 thousands, 3 hundreds, 2 tens and 6 ones.

What number do you have now?

3) Look at the bar model below. What number is missing?

4208	
3708	