
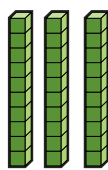


- 1) Find 10 more and 10 less than the number shown.

Use base ten blocks to help you.

10 more = _____

10 less = _____



- 2) Fill in the table below. The first row has been done for you.


Number	1 more	10 more	100 more
146	147	156	246
573			
			912
604			
	476		
		803	

- 1) True or false?

Statement	True or False?
a) 10 more than 462 > 100 less than 556	
b) 1 less than 750 < 100 more than 634	
c) 100 less than 643 = 10 more than 533	



- 2) Kareem starts with a number.
He puts it through the function machines.



He ends up with 676.

- a) What number did he start with? _____
- b) If Kareem had started off with 676, what number would he have ended up with? _____